



BLANK PAGE



2



2.

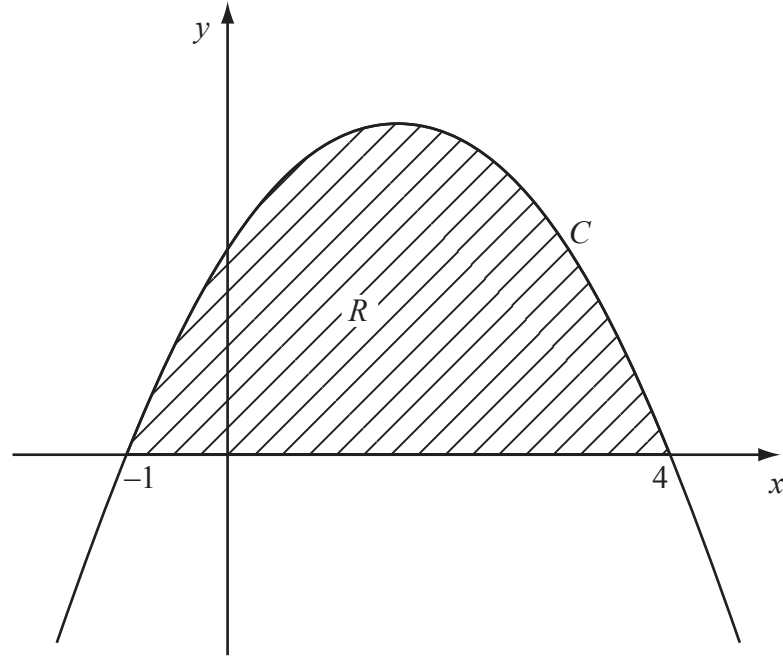


Figure 1

Figure 1 shows part of the curve C with equation $y = (1+x)(4-x)$.

The curve intersects the x -axis at $x = -1$ and $x = 4$. The region R , shown shaded in Figure 1, is bounded by C and the x -axis.

Use calculus to find the exact area of R .

(5)



5.

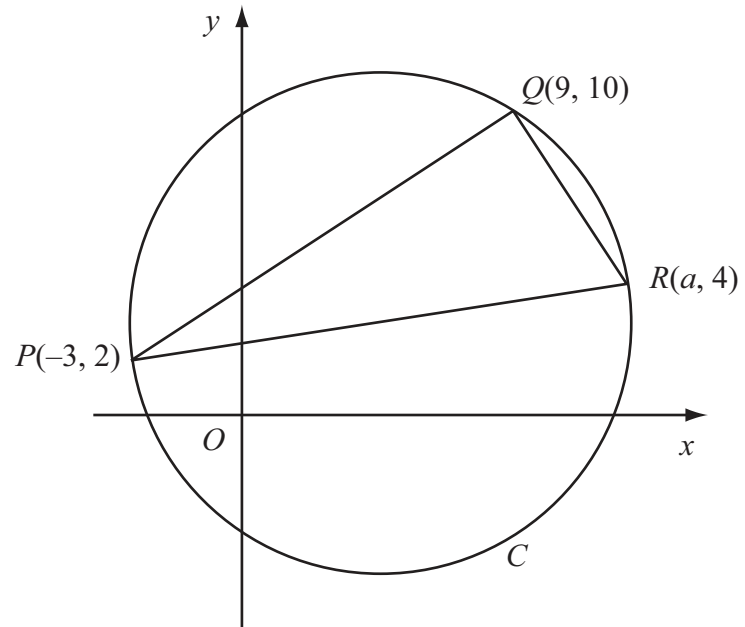


Figure 2

The points $P(-3, 2)$, $Q(9, 10)$ and $R(a, 4)$ lie on the circle C , as shown in Figure 2. Given that PR is a diameter of C ,

(a) show that $a = 13$, (3)

(b) find an equation for C . (5)



7.

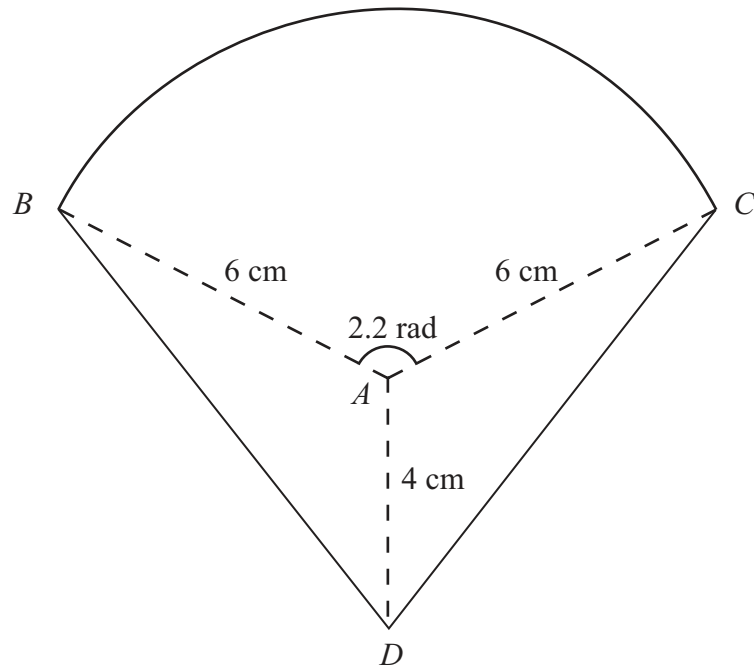


Figure 3

The shape BCD shown in Figure 3 is a design for a logo.

The straight lines DB and DC are equal in length. The curve BC is an arc of a circle with centre A and radius 6 cm. The size of $\angle BAC$ is 2.2 radians and $AD = 4$ cm.

Find

- (a) the area of the sector BAC , in cm^2 , (2)
- (b) the size of $\angle DAC$, in radians to 3 significant figures, (2)
- (c) the complete area of the logo design, to the nearest cm^2 . (4)



